

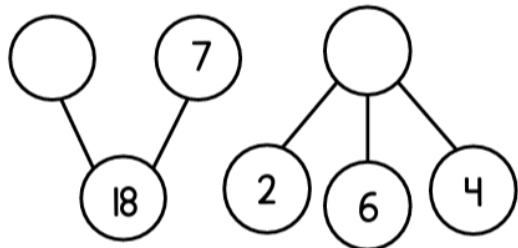


Y3 Knowledge Harvest – Addition and Subtraction

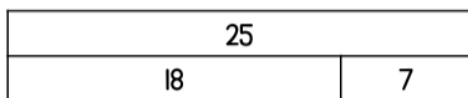


Prior knowledge

1 Complete the part-whole models.



2 Use the bar model to complete the number sentences.



$$7 + \square = 25 \quad \square - \square = 18$$

Intended knowledge

Find the missing number.

$$522 = 8 + \underline{\hspace{2cm}}$$

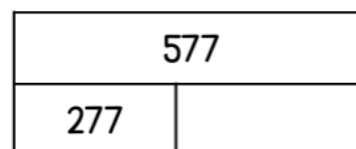

Complete the calculations. Show your working.

$$17 + 42 = \underline{\hspace{2cm}}$$

$$55 - 19 = \underline{\hspace{2cm}}$$

$$34 + 82 = \underline{\hspace{2cm}}$$

Complete the bar models.



Future knowledge

Complete the missing digits.

		3		9
+	1	4	2	
	5		9	9

Score:

